

Test: 2017 Primary 1 - Term 1 (CA1) Math (RGPS)

Points: 15 points

Name: _____

Score: _____

Date: _____

Signature: _____

Select multiple choice answers with a cross or tick:

Only select one answer

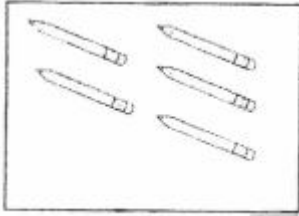
Can select multiple answers

Section A (5 x 1 mark)

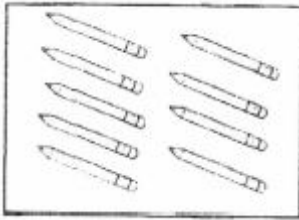
For each questions, four options are given. Choose the correct answer.

Marilyn has **10** pencils in her pencil case. Which one of the following is correct?

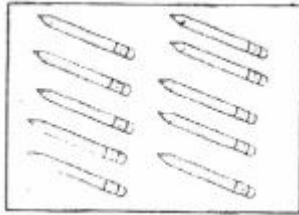
A)




B)



C)



D)

**Question 2 of 11**

1 less than 9 is _____.

A) 6

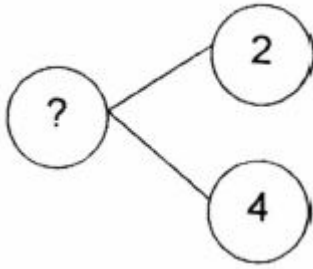
B) 2

C) 10

D) 8

Question 3 of 11

Primary 1 Math (Term 1) 1 pt




The missing number in the circle above is _____.

- A) 4
- B) 2
- C) 7
- D) 6

Question 4 of 11

Primary 1 Math (Term 1) 1 pt

Complete the number pattern.




-
- A) 5
 - B) 7
 - C) 3
 - D) 4

Question 5 of 11

Primary 1 Math (Term 1)

1 pt

How many **more** cats than fishes are there?



- A) 1
- B) 2
- C) 5
- D) 7

Question 6 of 11

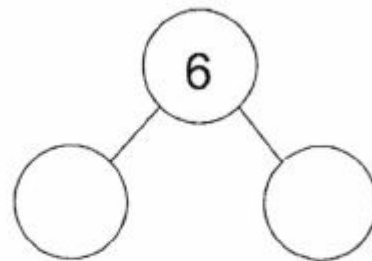
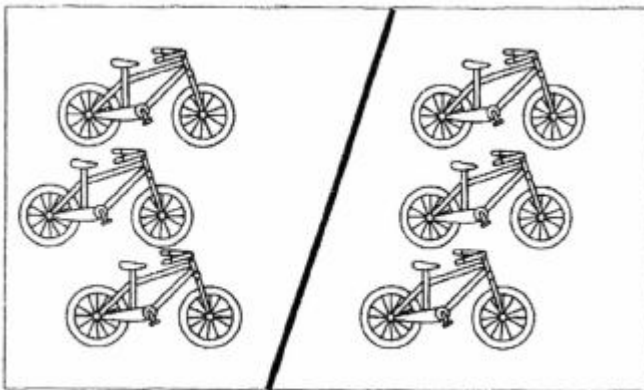
Primary 1 Math (Term 1)

2 pts

Section B (10 marks)

Choose/Type the correct answers.

Look at the picture below and complete the number bond.




- A) 4,4
- B) 3,3
- C) 1,2
- D) 6,1

Question 7 of 11


Primary 1 Math (Term 1) 2 pts

Choose the group that has **more** objects.

A)




B)



Question 8 of 11

Primary 1 Math (Term 1) 2 pts

Count the number of books and type in **words**.



There are _____ books.

Question 9 of 11

Primary 1 Math (Term 1) 2 pts

Which **two** numbers make 6?

- A) 0
 B) 1
 C) 3
 D) 4
 E) 5

Question 10 of 11

Primary 1 Math (Term 1) 1 pt

Look at the number pattern and answer questions 10 and 11.



The missing number is _____.

Question 11 of 11

Primary 1 Math (Term 1) 1 pt



_____ is **greater** than 1 but **smaller** than 5.
